


freebie!

Multiplication and Division

Common Core Standard 3.OA.3



also in Black & White!

DO YOU like WHAT YOU see?


Purchase the full product which includes 108
word problems [here](#).

Follow me for updates on my latest products.



I hope that you find this resource useful in your class.

When you get a chance, please provide feedback as this
helps to improve both existing and future products.



teacher notes

The highlighted problem types are included in this FREEBIE

- **Equal Groups (Unknown Product)**
- Equal Groups (Group Size Unknown)
- **Equal Groups (Number of Groups Unknown)**
- **Compare (Unknown Product)**
- Compare (Group Size Unknown)
- **Compare (Number of Groups Unknown)**



MULTIPLY OR DIVIDE?

There are 4 bunches of bananas. Each bunch has 5 bananas. How many bananas are there in all?

1



MULTIPLY OR DIVIDE?

There are 5 swings at the park. On each swing there are 2 children. How many children are there at the park?

2



MULTIPLY OR DIVIDE?

There are 4 bags with 6 carrots in each bag. How many carrots are there in all?

3



MULTIPLY OR DIVIDE?

There are 9 containers with 4 lolly-pops in each container. How many lolly-pops are there in all?

4



MULTIPLY OR DIVIDE?

There are 12 boxes of ice-creams in the freezer. If 4 ice-creams were in each box, how many are there altogether?


5



MULTIPLY OR DIVIDE?


There are 5 buses with 6 children in each bus. How many children are there in all?

6



multiply OR Divide?


If 32 tomatoes are packed 8 in a bag, then how many bags are needed?



7

multiply OR Divide?

80 lemons are placed equally into groups of 10. How many groups of lemons are there?



8

multiply OR Divide?

You have 48 inches of ribbon, which you will cut into pieces that are 8 inches long. How many pieces of ribbon will you have?



9

multiply OR Divide?

If 72 children are organized 9 into a group, then how many groups will there be?



10

multiply OR Divide?

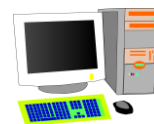
Mr. Martin had 70 pieces of paper, and he made bundles by stapling every 10 pieces of paper together. How many bundles could he make?



11

multiply OR Divide?

There are 60 computers in a truck. If John delivers 10 computers at each house, how many houses does he need to drive to?



12

multiply OR Divide?

George pays \$6 a week to use his mobile phone. Tom pays 4 times more than George. How much does Tom pay to use his phone?

13



multiply OR Divide?

Sarah's restaurant charges \$12 for a pizza. Riley's restaurant charges 3 times more than Sarah. How much does Riley charge for his pizza?

14



multiply OR Divide?

There were 5 pirates on the black ship. There were 3 times more pirates on the blue ship. How many pirates were on the blue ship?

15



multiply OR Divide?

The medium shark ate 4 fish for dinner. The large shark ate 3 times more than the medium shark. How many fish did the large shark eat?

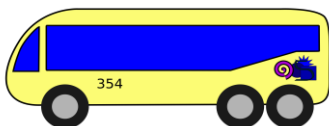
16



multiply OR Divide?

Robert pays \$12 a day to catch the bus. Tim pays twice as much as Robert. How much does Tim pay to catch the bus?

17



multiply OR Divide?

Jordan has 12 DVDs stored in his cabinet. Jesse has 5 times more DVDs than Jordan. How many DVDs does Jesse have?

18



MULTIPLY OR DIVIDE?

George is 8 years old. His grandpa, Liam, is 72 years old. How many times older is Liam than George?



19

MULTIPLY OR DIVIDE?

At the zoo there are 49 monkeys and 7 lions. How many times more monkeys are at the zoo than lions?



20

MULTIPLY OR DIVIDE?

Tom has 72 pencils. Lisa has 12 pencils. How many times more pencils does Tom have than Lisa?



21

MULTIPLY OR DIVIDE?


A pink umbrella costs \$36. A blue umbrella costs \$9. How many times more expensive is the pink umbrella than the blue umbrella?



22

MULTIPLY OR DIVIDE?

Pippa has 7 horses. Pete has 21 horses. How many times more horses does Pete have than Pippa?



23

MULTIPLY OR DIVIDE?

Molly has 6 hats. Jill has 30 hats. How many times more hats does Jill have than Molly?



24

MULTIPLY OR DIVIDE?

There are 4 bunches of bananas. Each bunch has 5 bananas. How many bananas are there in all?

1



MULTIPLY OR DIVIDE?

There are 5 swings at the park. On each swing there are 2 children. How many children are there at the park?

2



MULTIPLY OR DIVIDE?

There are 4 bags with 6 carrots in each bag. How many carrots are there in all?

3



MULTIPLY OR DIVIDE?

There are 9 containers with 4 lolly-pops in each container. How many lolly-pops are there in all?

4



MULTIPLY OR DIVIDE?

There are 12 boxes of ice-creams in the freezer. If 4 ice-creams were in each box, how many are there altogether?

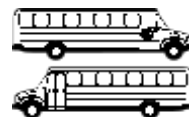
5



MULTIPLY OR DIVIDE?

There are 5 buses with 6 children in each bus. How many children are there in all?

6



MULTIPLY OR DIVIDE?

If 32 tomatoes are packed 8 in a bag, then how many bags are needed?



7

MULTIPLY OR DIVIDE?

80 lemons are placed equally into groups of 10. How many groups of lemons are there?



8

MULTIPLY OR DIVIDE?

You have 48 inches of ribbon, which you will cut into pieces that are 8 inches long. How many pieces of ribbon will you have?



9

MULTIPLY OR DIVIDE?

If 72 children are organized 9 into a group, then how many groups will there be?



10

MULTIPLY OR DIVIDE?

Mr. Martin had 70 pieces of paper, and he made bundles by stapling every 10 pieces of paper together. How many bundles could he make?



11

MULTIPLY OR DIVIDE?

There are 60 computers in a truck. If John delivers 10 computers at each house, how many houses does he need to drive to?



12

MULTIPLY OR DIVIDE?

George pays \$6 a week to use his mobile phone. Tom pays 4 times more than George. How much does Tom pay to use his phone?

13



MULTIPLY OR DIVIDE?

Sarah's restaurant charges \$12 for a pizza. Riley's restaurant charges 3 times more than Sarah. How much does Riley charge for his pizza?

14



MULTIPLY OR DIVIDE?

There were 5 pirates on the black ship. There were 3 times more pirates on the blue ship. How many pirates were on the blue ship?

15



MULTIPLY OR DIVIDE?

The medium shark ate 4 fish for dinner. The large shark ate 3 times more than the medium shark. How many fish did the large shark eat?


16



MULTIPLY OR DIVIDE?

Robert pays \$12 a day to catch the bus. Tim pays twice as much as Robert. How much does Tim pay to catch the bus?

17



MULTIPLY OR DIVIDE?

Jordan has 12 DVDs stored in his cabinet. Jesse has 5 times more DVDs than Jordan. How many DVDs does Jesse have?

18



MULTIPLY OR DIVIDE?

George is 8 years old. His grandpa, Liam, is 72 years old. How many times older is Liam than George?



19

MULTIPLY OR DIVIDE?

At the zoo there are 49 monkeys and 7 lions. How many times more monkeys are at the zoo than lions?



20

MULTIPLY OR DIVIDE?

Tom has 72 pencils. Lisa has 12 pencils. How many times more pencils does Tom have than Lisa?



21

MULTIPLY OR DIVIDE?


A pink umbrella costs \$36. A blue umbrella costs \$9. How many times more expensive is the pink umbrella than the blue umbrella?



22

MULTIPLY OR DIVIDE?

Pippa has 7 horses. Pete has 21 horses. How many times more horses does Pete have than Pippa?



23

MULTIPLY OR DIVIDE?

Molly has 6 hats. Jill has 30 hats. How many times more hats does Jill have than Molly?



24

Multiplication and Division

RECORD SHEET

Task Card	Answer	Task Card	Answer
1		13	
2		14	
3		15	
4		16	
5		17	
6		18	
7		19	
8		20	
9		21	
10		22	
11		23	
12		24	

Multiplication and Division

ANSWER KEY

Task Card	Answer	Task Card	Answer
1	20 bananas	13	\$24
2	10 children	14	\$36
3	24 carrots	15	15 pirates
4	36 lolly-pops	16	12 fish
5	48 ice-creams	17	\$24
6	30 children	18	60 DVDs
7	4 bags	19	9
8	8 groups	20	7
9	6 pieces	21	6
10	8 groups	22	4
11	7 bundles	23	3
12	6 houses	24	5